

Time: 10 Minutes

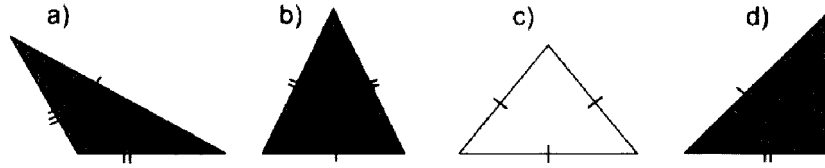
Paper Math 5

Total Marks: 10

5th Month, 1st Week, 5th Day | Syllabus: Unit 7: Ex.# 2 Q. No. 1, 2

Q.No.1. Identify these triangles with respect to their sides: (10)

سوال نمبر 1: ان مثلثوں کی شناخت اضلاع کے لحاظ سے کریں:




---



---



---



---

Time: 10 Minutes

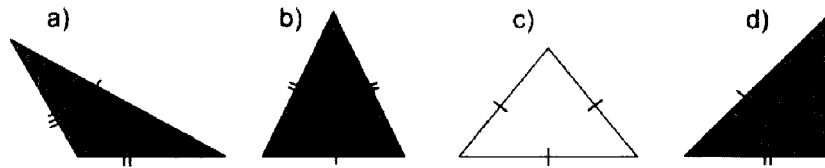
Paper Math 5

Total Marks: 10

5th Month, 1st Week, 5th Day | Syllabus: Unit 7: Ex.# 2 Q. No. 1, 2

Q.No.1. Identify these triangles with respect to their sides: (10)

سوال نمبر 1: ان مثلثوں کی شناخت اضلاع کے لحاظ سے کریں:




---



---



---



---

Time: 10 Minutes

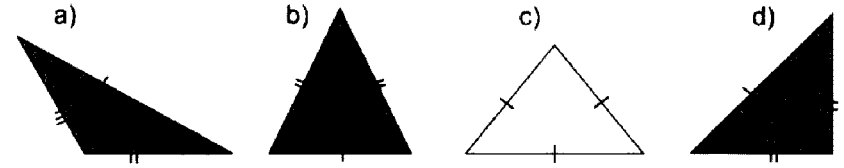
Paper Math 5

Total Marks: 10

5th Month, 1st Week, 5th Day | Syllabus: Unit 7: Ex.# 2 Q. No. 1, 2

Q.No.1. Identify these triangles with respect to their sides: (10)

سوال نمبر 1: ان مثلثوں کی شناخت اضلاع کے لحاظ سے کریں:




---



---



---



---

Time: 10 Minutes

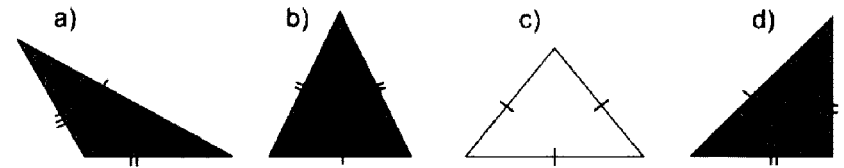
Paper Math 5

Total Marks: 10

5th Month, 1st Week, 5th Day | Syllabus: Unit 7: Ex.# 2 Q. No. 1, 2

Q.No.1. Identify these triangles with respect to their sides: (10)

سوال نمبر 1: ان مثلثوں کی شناخت اضلاع کے لحاظ سے کریں:




---



---



---



---